


Equivalent Fractions

I can identify equivalent fractions.



Colour in a $\frac{1}{2}$ on the fraction wall. In different colours, colour in fractions which are equivalent to $\frac{1}{2}$ and write in the boxes below what the equivalent fractions are.



$\frac{1}{2}$




Equivalent Fractions

I can identify equivalent fractions.



Colour in a $\frac{1}{3}$ on the fraction wall. In different colours, colour in fractions which are equivalent to $\frac{1}{3}$ and write in the boxes below what the equivalent fractions are.

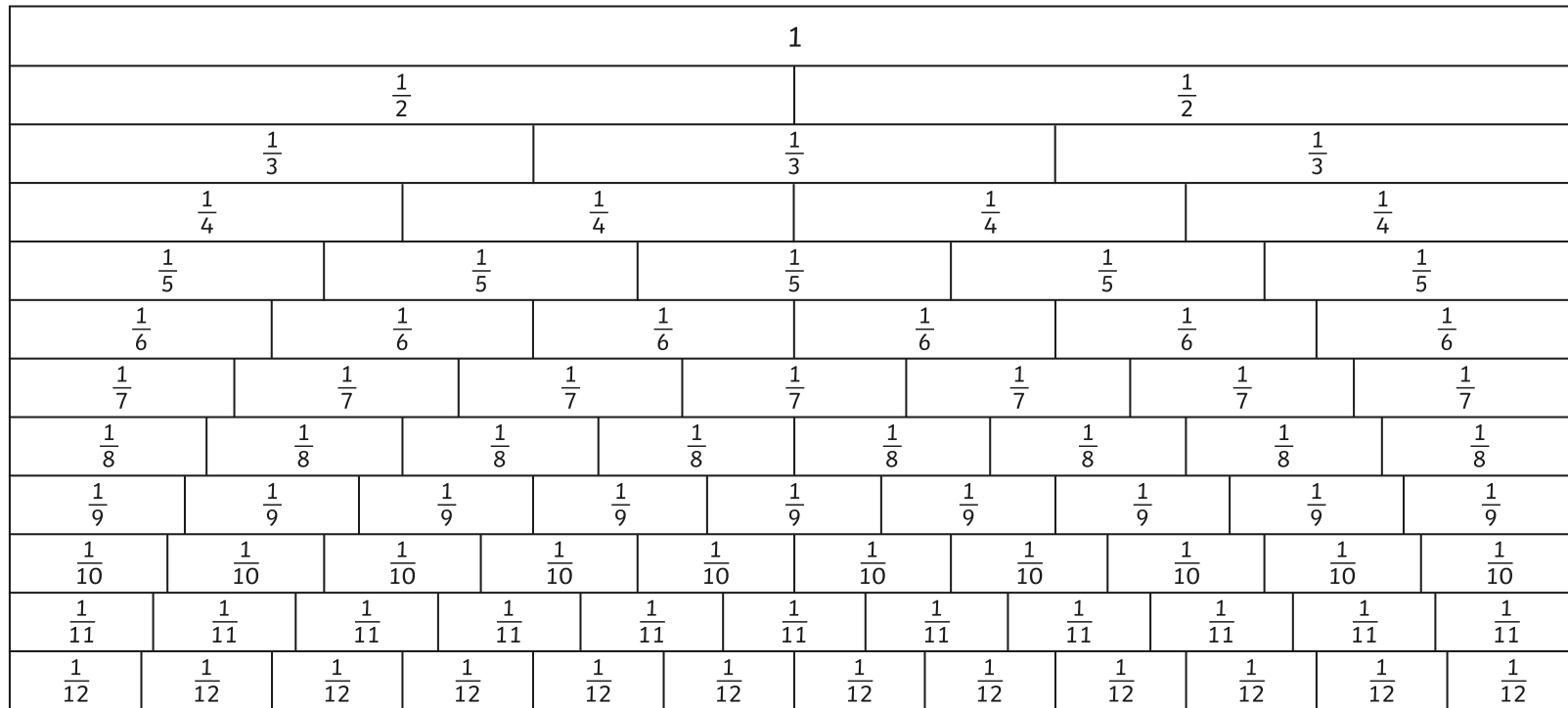


$\frac{1}{3}$



Colour in the fraction $\frac{3}{4}$ on the first fraction wall.

On the other fraction walls, colour in fractions which are equivalent to $\frac{3}{4}$ and write the fraction underneath.



$\frac{3}{4}$



Choose another fraction and find equivalent fractions to your fraction.

1											
$\frac{1}{2}$						$\frac{1}{2}$					
$\frac{1}{3}$				$\frac{1}{3}$				$\frac{1}{3}$			
$\frac{1}{4}$			$\frac{1}{4}$			$\frac{1}{4}$			$\frac{1}{4}$		
$\frac{1}{5}$		$\frac{1}{5}$		$\frac{1}{5}$		$\frac{1}{5}$		$\frac{1}{5}$		$\frac{1}{5}$	
$\frac{1}{6}$		$\frac{1}{6}$		$\frac{1}{6}$		$\frac{1}{6}$		$\frac{1}{6}$		$\frac{1}{6}$	
$\frac{1}{7}$		$\frac{1}{7}$		$\frac{1}{7}$		$\frac{1}{7}$		$\frac{1}{7}$		$\frac{1}{7}$	
$\frac{1}{8}$		$\frac{1}{8}$		$\frac{1}{8}$		$\frac{1}{8}$		$\frac{1}{8}$		$\frac{1}{8}$	
$\frac{1}{9}$		$\frac{1}{9}$		$\frac{1}{9}$		$\frac{1}{9}$		$\frac{1}{9}$		$\frac{1}{9}$	
$\frac{1}{10}$		$\frac{1}{10}$		$\frac{1}{10}$		$\frac{1}{10}$		$\frac{1}{10}$		$\frac{1}{10}$	
$\frac{1}{11}$		$\frac{1}{11}$		$\frac{1}{11}$		$\frac{1}{11}$		$\frac{1}{11}$		$\frac{1}{11}$	
$\frac{1}{12}$		$\frac{1}{12}$		$\frac{1}{12}$		$\frac{1}{12}$		$\frac{1}{12}$		$\frac{1}{12}$	




Equivalent Fractions

I can identify equivalent fractions.



Colour in a $\frac{3}{4}$ on the fraction wall. In different colours, colour in fractions which are equivalent to $\frac{3}{4}$ and write in the boxes below what the equivalent fractions are.

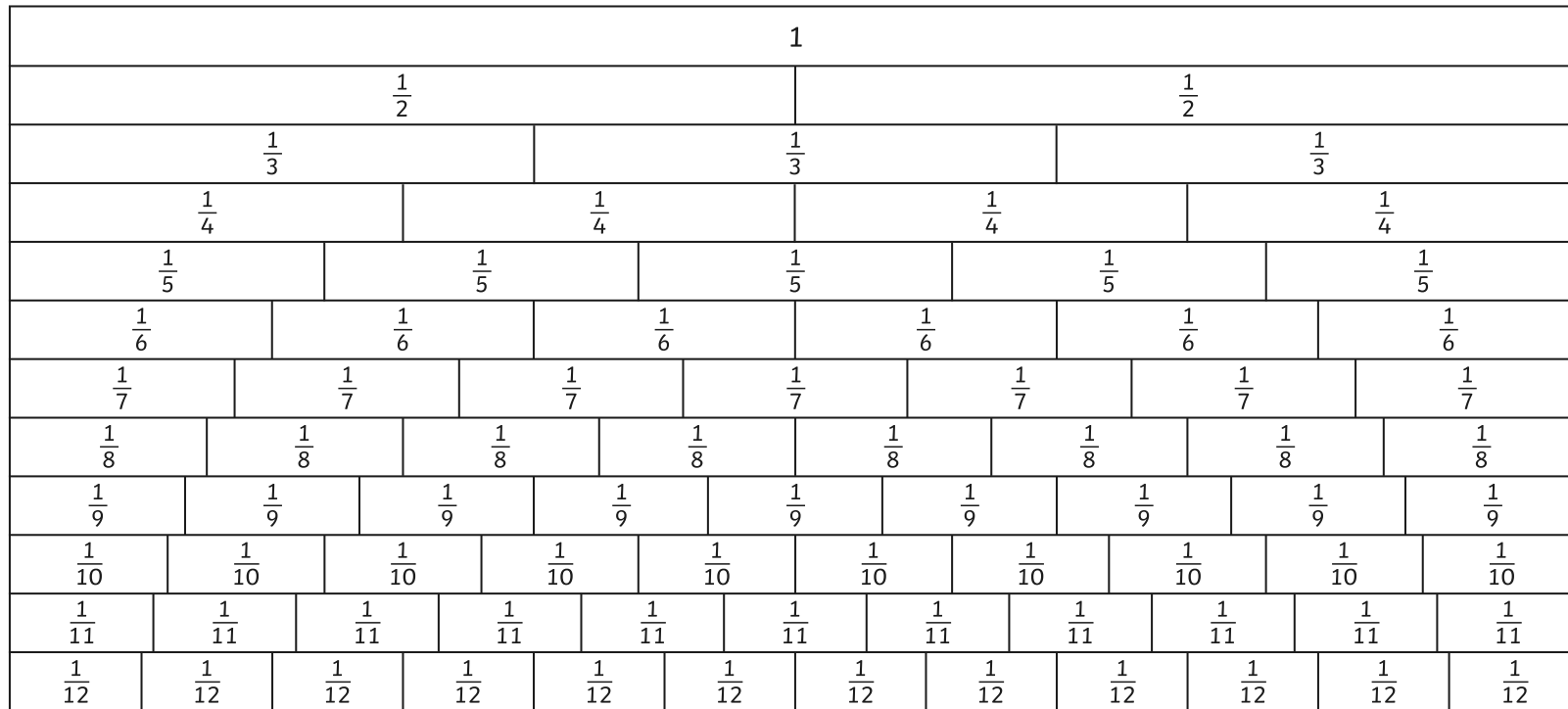


$\frac{3}{4}$



Colour in the fraction $\frac{2}{3}$ on the first fraction wall.

On the other fraction walls, colour in fractions which are equivalent to $\frac{2}{3}$ and write the fraction underneath.



$\frac{2}{3}$



Choose another fraction and find equivalent fractions to your fraction.

1											
$\frac{1}{2}$						$\frac{1}{2}$					
$\frac{1}{3}$				$\frac{1}{3}$				$\frac{1}{3}$			
$\frac{1}{4}$			$\frac{1}{4}$			$\frac{1}{4}$			$\frac{1}{4}$		
$\frac{1}{5}$		$\frac{1}{5}$		$\frac{1}{5}$		$\frac{1}{5}$		$\frac{1}{5}$		$\frac{1}{5}$	
$\frac{1}{6}$		$\frac{1}{6}$		$\frac{1}{6}$		$\frac{1}{6}$		$\frac{1}{6}$		$\frac{1}{6}$	
$\frac{1}{7}$		$\frac{1}{7}$		$\frac{1}{7}$		$\frac{1}{7}$		$\frac{1}{7}$		$\frac{1}{7}$	
$\frac{1}{8}$		$\frac{1}{8}$		$\frac{1}{8}$		$\frac{1}{8}$		$\frac{1}{8}$		$\frac{1}{8}$	
$\frac{1}{9}$		$\frac{1}{9}$		$\frac{1}{9}$		$\frac{1}{9}$		$\frac{1}{9}$		$\frac{1}{9}$	
$\frac{1}{10}$		$\frac{1}{10}$		$\frac{1}{10}$		$\frac{1}{10}$		$\frac{1}{10}$		$\frac{1}{10}$	
$\frac{1}{11}$		$\frac{1}{11}$		$\frac{1}{11}$		$\frac{1}{11}$		$\frac{1}{11}$		$\frac{1}{11}$	
$\frac{1}{12}$		$\frac{1}{12}$		$\frac{1}{12}$		$\frac{1}{12}$		$\frac{1}{12}$		$\frac{1}{12}$	